





Name _____

Forces With Levers—Hammers and Balls

Height of the Hammer In Centimeters	<u>Yellow Solid Ball</u> Distance Measured In Centimeters	<u>White Hollow Ball</u> Distance Measured In Centimeters
Acute Angle 		
Right Angle 		
Obtuse Angle 		
Straight Angle 		

1. What pattern do you see in the **Yellow Solid Ball** and **White Hollow Ball** columns?

2. What are your conclusions about this?

A. _____

B. _____

C. _____
